







## ÇARPIMLARI YİRMİYE KADAR OLAN SAYILARLA ÇARPMA



$$3 + 3 + 3 + 3 = 12$$

4	tane	3		12 eder.
4	defa	3		12 eder.
4	kere	3		12 eder.
4	çarpı	3	eşittir	12 eder.
4	x	3	=	12

3 (Her grubun kaç tane elması var?)  
 4 (Kaç tane 3'er li grup var?)  
 X \_\_\_\_\_  
 12 (Bütün gruplardaki elma sayısı)



$$4 + 4 + 4 + 4 = 16$$

4	tane	4		16 eder.
4	defa	4		16 eder.
4	kere	4		16 eder.
4	çarpı	4	eşittir	16 eder.
4	x	4	=	16

4  
 4  
 X \_\_\_\_\_  
 16



....



....

....

$$..... + ..... + ..... = .....$$

....	tane	....		.... eder.
....	defa	....		.... eder.
....	kere	....		.... eder.
....	çarpı	....	eşittir	.... eder.
....	x	....	=	....

.....

....  
 ....  
 X \_\_\_\_\_  
 .....